




Name: _____ Date: _____

Instructions: Arrange the tiles according to the algebraic expression given. The tiles need to be arranged in such a manner that they collectively form a shape of a square or rectangle. The hint box denotes which shape and color to use for which term. One is done for you.

Hint: x^2 -  x -  1 - 

1) $2x+4$



2) $x+3$

3) x^2+2x

4) x^2+2

5) $2x^2+2$

6) x^2+4